

Fractions and Division

What fraction does each person get when they share equally?


1. Eight friends share 3 bags of toys. _____
2. Five people share 2 jugs of water. _____

Five friends are sharing supplies on a camping trip. Tell what fraction each person gets when they share equally.

3. Two boxes of trail mix. _____
4. Three packages of water purifying tablets. _____
5. **Reasoning** Four people each bought 2 bottles of Vermont maple syrup. Each person plans to share their bottles with 3 friends. How much does each person get? _____

6. Which model represents 6 people sharing 1 five-foot sub?


A



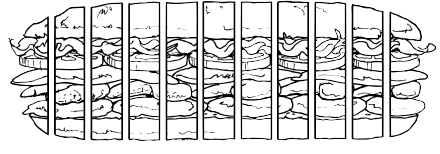
C



B



D



7. **Writing to Explain** Several friends are taking turns flying a kite. Each friend flies the kite for the same amount of time. They spend 6 hours flying the kite altogether. Explain what information you need to find how long each friend flew the kite for.
