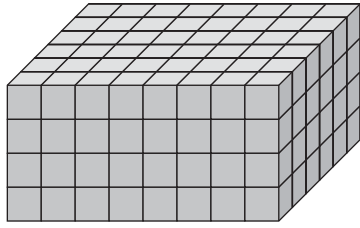





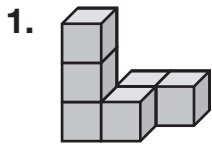
Views of Solids: Perspective



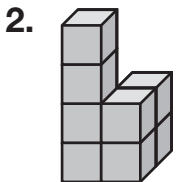
4 high by 8 wide by 6 deep

<p>Front view:</p>  <p>The front view of the solid is 32 cubes.</p>	<p>Side view:</p>  <p>The side view of the solid is 24 cubes.</p>	<p>Top or bottom view:</p>  <p>The top view and the bottom view are the same, 48 cubes.</p>
---	---	---

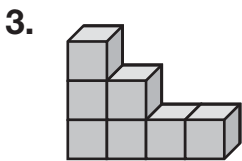
Draw front, right, and top views of each stack of unit blocks.



front



front



front