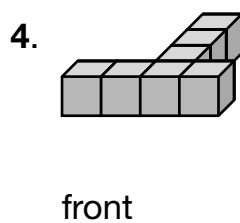
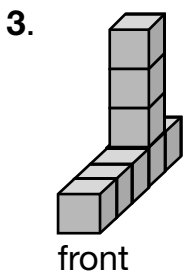
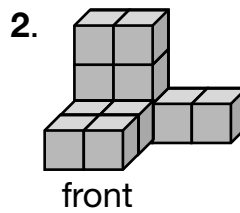
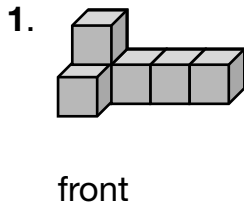


Views of Solids: Perspective

For 1 through 4, draw front, right, and top views of each stack of unit blocks.



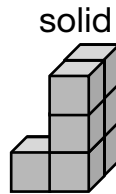
For 5 through 7, draw the perspective of the figure.

5. The side view of a cube

6. The top view of a rectangular prism

7. The side view of a rectangular prism

8. Which view is shown for this solid?



A front

B top

C side

D bottom

9. **Writing to Explain** What is the difference between the shape of a side view of a rectangular pyramid and a top-down view of a rectangular pyramid?
