


# Solids

Complete the table.

Solid Figure	Number of Faces	Number of Edges	Number of Vertices
1. Square Pyramid			
2. Cube			
3. Triangular Prism			

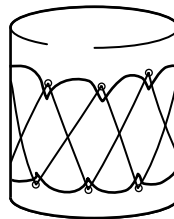
Identify the solid that best describes each object.

4.




\_\_\_\_\_

5.



\_\_\_\_\_

6.




\_\_\_\_\_

7. How many total faces does a rectangular prism have?

\_\_\_\_\_

8. Which solid does the figure represent?



**A** Rectangular pyramid

**C** Rectangular prism

**B** Cylinder

**D** Square pyramid

9. **Writing to Explain** Explain the difference between a plane figure and a solid figure.

\_\_\_\_\_

\_\_\_\_\_

\_\_\_\_\_

\_\_\_\_\_