


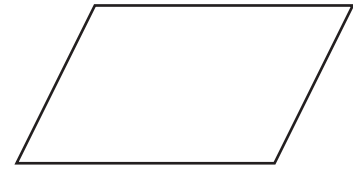
# Quadrilaterals



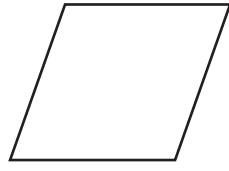
**Square**  
There are four right angles. All sides are the same length.



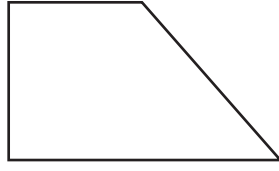
**Rectangle**  
There are four right angles.



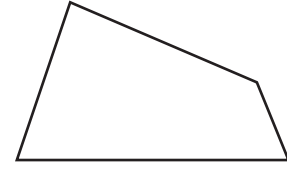
**Parallelogram**  
Opposite sides are parallel.



**Rhombus**  
Opposite sides are parallel and all sides are the same length.



**Trapezoid**  
There is only one pair of parallel sides.



**Quadrilateral**  
A polygon with 4 sides.

Reteaching 8-5

Write the name of each quadrilateral.

