


Quadrilaterals

Write all the names you can use for each quadrilateral.

1.



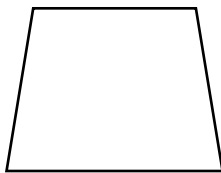
2.



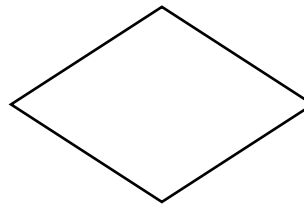
3.



4.



5.



6. Which is **NOT** a quadrilateral?

- A** Rhombus **B** Rectangle **C** Right triangle **D** Trapezoid

7. **Writing to Explain** Explain why a square can never be a trapezoid.

