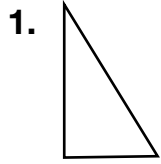
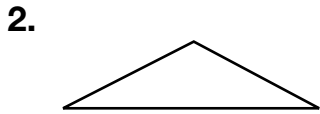
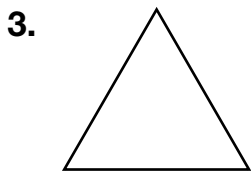


Triangles

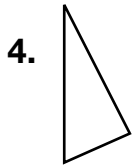
Classify each triangle by its sides and then by its angles.

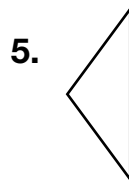






Classify each triangle by its sides.





6. Which is a triangle with one right angle?

- A** Scalene triangle **B** Obtuse triangle **C** Right triangle **D** Acute triangle

7. **Writing to Explain** Why can't a triangle have more than one obtuse angle?

