



Line Segments, Rays, and Angles

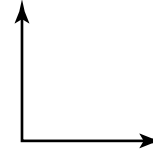
Here are some important geometric terms.



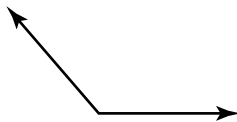
Line segment
A part of a line. It has two endpoints. This is line segment XY .



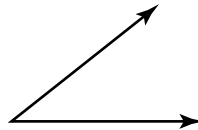
Ray
A part of a line. It has one endpoint and goes on and on in one direction. This is ray AB .




Right angle
A square corner.



Obtuse angle
Greater than a right angle.



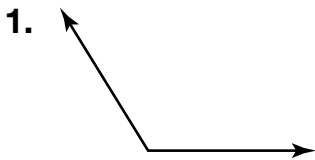


Acute angle
Less than a right angle.



Straight angle
Forms a straight line.

Use geometric terms to describe what is shown. Be as specific as possible.



4. Name three different rays.

5. Name two different line segments.

