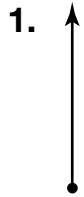
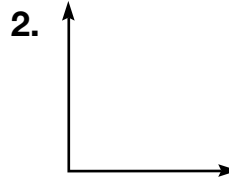


# Line Segments, Rays, and Angles

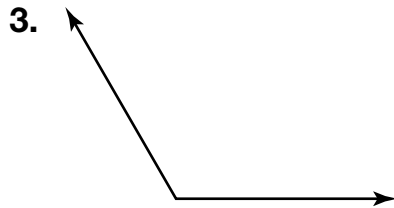
Use geometric terms to describe what is shown. Be as specific as possible.




\_\_\_\_\_



\_\_\_\_\_



\_\_\_\_\_



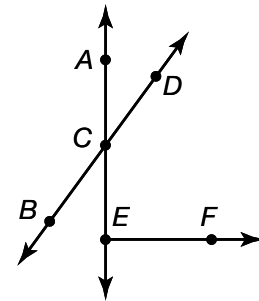
\_\_\_\_\_

5. Name two line segments.

\_\_\_\_\_

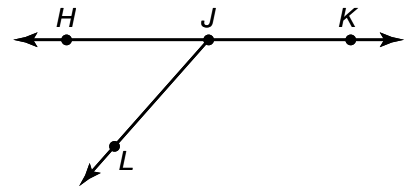
6. Name two obtuse angles.

\_\_\_\_\_



7. Which is the geometric term for  $\angle HJK$ ?

- A Acute angle      C Right angle
- B Obtuse angle    D Straight angle



8. **Writing to Explain** Describe an acute angle.

\_\_\_\_\_  
\_\_\_\_\_