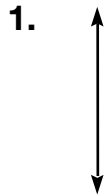
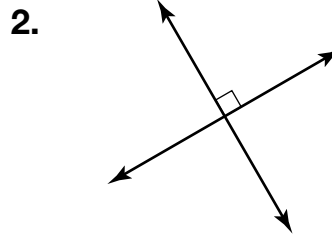


# Points, Lines, and Planes

Use geometric terms to describe what is shown. Be as specific as possible.



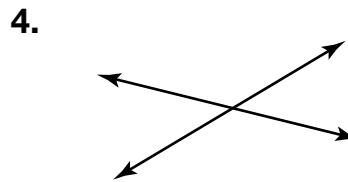
\_\_\_\_\_



\_\_\_\_\_



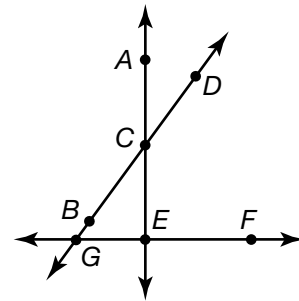
\_\_\_\_\_



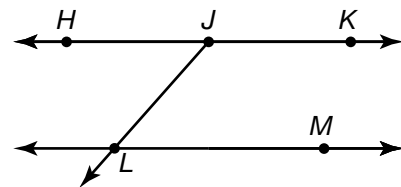
\_\_\_\_\_

5. Name two lines.  
\_\_\_\_\_

6. Name two lines that are perpendicular.  
\_\_\_\_\_



7. Which two lines are parallel?  
**A**  $\overleftrightarrow{HK}$  and  $\overleftrightarrow{JL}$     **C**  $\overleftrightarrow{HJ}$  and  $\overleftrightarrow{JK}$   
**B**  $\overleftrightarrow{HJ}$  and  $\overleftrightarrow{JL}$     **D**  $\overleftrightarrow{HJ}$  and  $\overleftrightarrow{LM}$



8. **Writing to Explain** Describe a point.  
 \_\_\_\_\_  
 \_\_\_\_\_