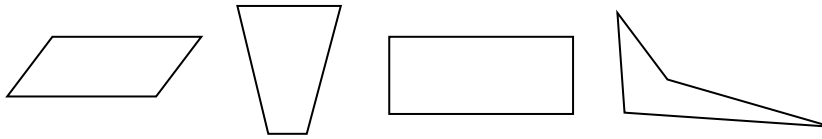


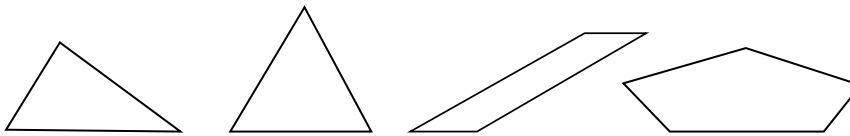
Problem Solving: Make and Test Generalizations

For **1** through **3**, use the images to make a generalization and test your answer.


1.



2.



3.



4. Which answer below is a good generalization about all rectangular prisms?

- A** All rectangular prisms have same sized faces
- B** All rectangular prisms have 12 edges
- C** All rectangular prisms are cubes
- D** All rectangular prisms have 1 net



5. **Writing to Explain** Try to draw a triangle with 2 right or obtuse angles. What generalizations can you make about the angles of a triangle? Explain.
