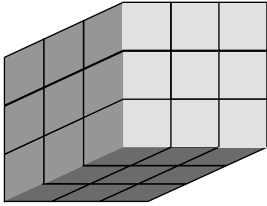


Block Party

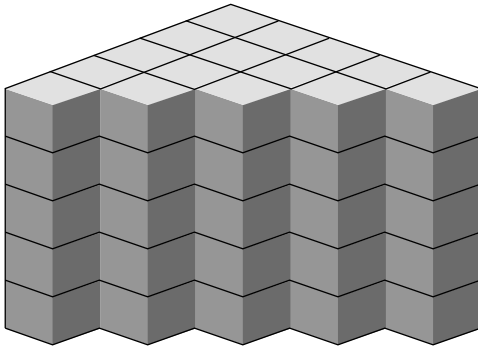
Find the pattern of blocks in each structure. Then write the total number of blocks.

1. There are 3 levels.




Total number of blocks: _____

2. There are 5 levels.



Total number of blocks: _____

3. Copy the pattern of 3 shaded blocks, 2 striped blocks, and 1 spotted block. Repeat this pattern to draw a side view of a staircase with 12 shaded blocks, 8 striped blocks, and 4 spotted blocks.



Pattern: