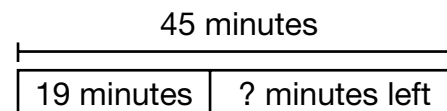
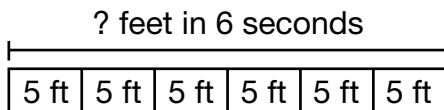


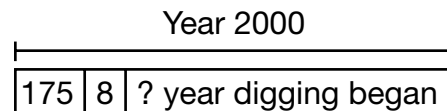
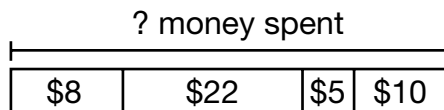
Problem Solving: Draw a Picture and Write an Equation

For 1–4 write an equation and solve. Use the picture to help you.

- A remote control car has a speed of 5 feet per second. How many feet will the car travel in 6 seconds?
- Danny has 45 minutes to take a math test. If Danny finishes half the test in 19 minutes, how many minutes does he have left to finish it?



- While shopping, Janet bought a shirt for \$8, a pair of jeans for \$22, mittens for \$5, and a hat for \$10. How much money did Janet spend?
- The 175th anniversary of the completion of the Erie Canal was in the year 2000. If it took 8 years to dig the Canal, in what year did the digging of the Erie Canal begin?



- The average length of a song on a certain CD is 3 minutes. The CD has 12 songs. Write an equation for the length of the whole CD. Draw a picture to help you.

A 12×3

B $12 + 3$

C $12 \div 3$

D $12 - 3$

- Writing to Explain** It takes Jinny 56 minutes to drive to her friend's house. She drove 15 minutes and then stopped at a store. She then drove another 10 minutes. What do you need to do to find the amount of time she has left to drive?
