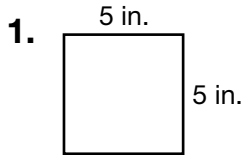
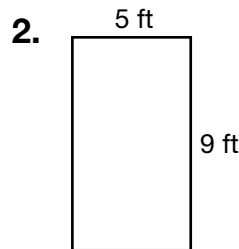
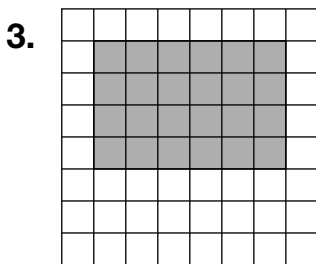


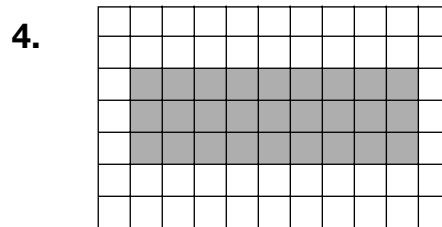
Area of Squares and Rectangles

Find the area of each figure.



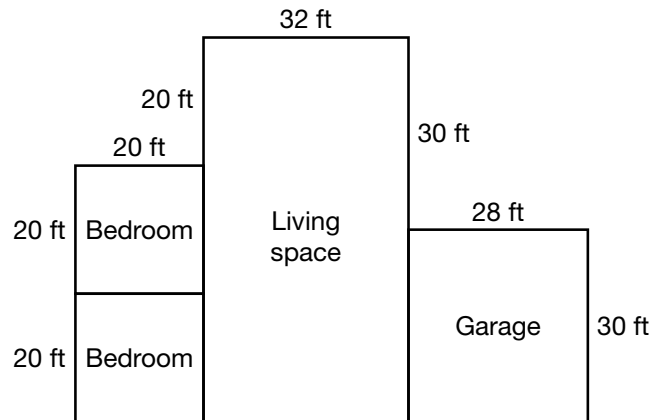






5. What is the area of one of the bedrooms?

6. What is the area of the garage?



7. Which is the area of a rectangle with a length of 26 cm and a width of 34 cm?

- A** 992 cm **B** 884 cm **C** 720 cm **D** 324 cm

8. **Writing to Explain** Explain how you would find the length of one side of a square if the area is 36 square units.
