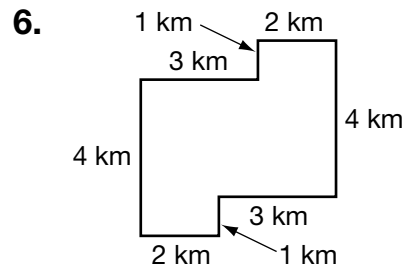
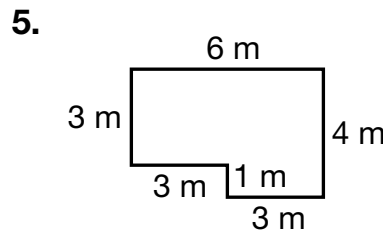
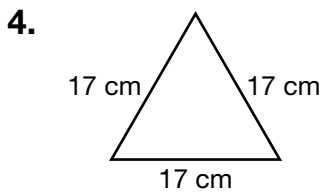
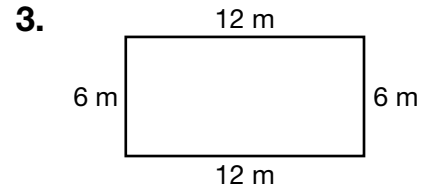
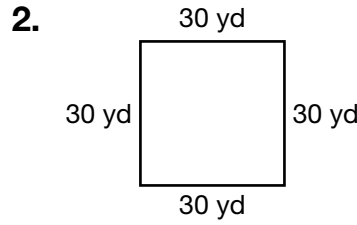
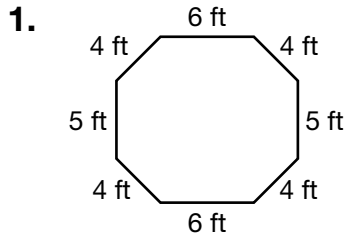
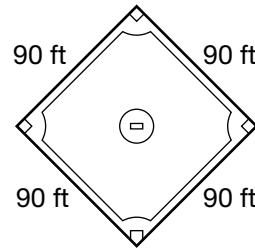


Perimeter

Find the perimeter of each figure.

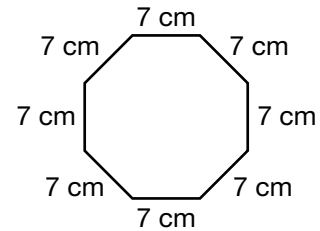


7. What is the perimeter around the bases?



8. Which is the perimeter of this figure?

- A 77 cm
- B 63 cm
- C 56 cm
- D 28 cm



9. **Writing to Explain** Explain how you can use multiplication to find the perimeter of a square.
