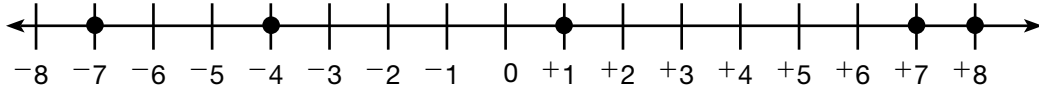


Ordering Integers

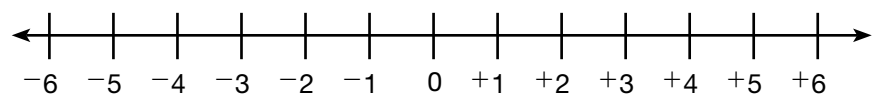
Order the integers from greatest to least: $+8, -4, +1, -7, +7$.

Use a number line to locate each integer.



From greatest to least: $+8, +7, +1, -4, -7$.

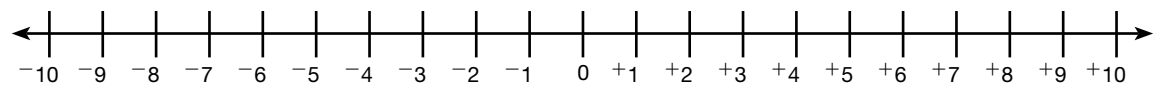
For **1** and **2**, write the integers in order from least to greatest. Use the number line below to help you.



1. $-4, +3, -1$

2. $+2, +3, -5$

For **3** and **4**, write the integers in order from greatest to least. Use the number line below to help you.



3. $+8, -7, -9$

4. $-10, +5, 0$
