



# Shady Spots


Each grid stands for one dollar. Darcy shaded designs to show parts of a dollar. How much of each large square is shaded? Write your answer as a money amount, a decimal, and a fraction.




1. \_\_\_\_\_




2. \_\_\_\_\_




3. \_\_\_\_\_



4. \_\_\_\_\_




5. \_\_\_\_\_

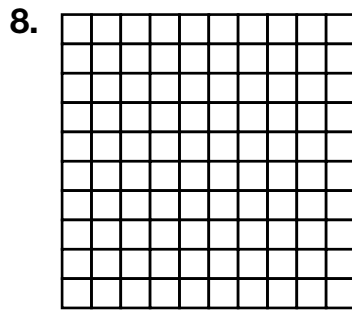


6. \_\_\_\_\_

Shade a design to show the money amount.



\$0.20



\$0.46