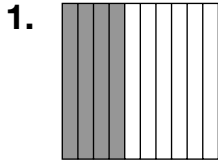
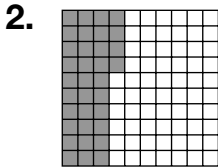


Decimal Place Value

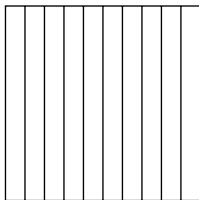
Write the word form and decimal for each shaded part.






For each fact, shade a grid to show the part of the population of each country that lives in cities.


3. In Jamaica, 0.5 of the people live in cities.



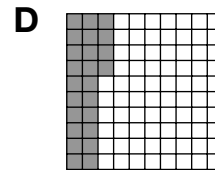
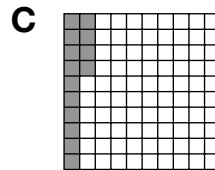
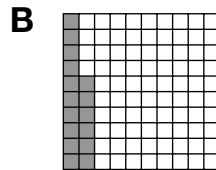
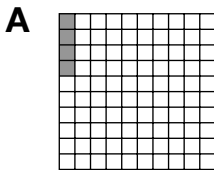
4. Only 0.11 of the population of Uganda live in cities.



5. In Norway, 0.72 of the people live in cities.



6. Which grid shows fourteen hundredths?



7. **Writing to Explain** Explain why one column in a hundredths grid is equal to one column in a tenths grid.
